

Section 1: Logical Reasoning (25 Questions)

1. Which shape is different from the others?



- A.  B.  C.  D. 

Ans: D

2. What comes next in the pattern? 2, 4, 6,

- A. 7 B. 8 C. 9 D. 10

Ans: B

3. If □ = Orange,  = Apple, then  = ?

- A. Animal B. Banana C. Toy D. Car

Ans: A

4. Which number is odd?

- A. 8 B. 2 C. 5 D. 6

Ans: C

5. Find the missing number: 3, 6, __, 12

- A. 9 B. 7 C. 8 D. 10

Ans: A

6. Which picture is the odd one out?

- A. Clock B. Watch C. Fan D. Time

Ans: C

7. What comes next? □□□□□__

- A. □ B. □ C. □ D. □

Ans: A

8. Choose the correct pair:

- A. Dog – Meows
B. Cat – Barks
C. Cow – Moos
D. Duck – Roars

Ans: C

9. Count and choose: □□□□□

- A. 4 B. 6 C. 5 D. 3

Ans: C

10. Ria is taller than Pia. Pia is taller than Tia.

Who is tallest?

- A. Tia B. Pia C. Ria D. All same

Ans: C

11. Which is odd one out?

- A. Mango B. Apple C. Banana D. Chair

Ans: D

12. What comes next? ▲ ● ▲ ● ?

- A. ▲ B. ● C. ■ D. ★

Ans: A

13. Which of these animals lives in water?

- A. Dog B. Cat C. Fish D. Tiger

Ans: C

14. Find the odd one:




- A. Car B. Bus C. Cycle D. Mango

Ans: D

15. Which number is missing? 5, 10, __, 20

- A. 11 B. 15 C. 12 D. 14

Ans: B

16. If  = Girl,  = Boy, then  = ?

- A. Man B. Woman C. Baby D. Teacher

Ans: B

17. Choose the odd one:

- A. Square B. Triangle C. Rectangle D. Orange

Ans: D

18. Which is the smallest?

- A. Ant B. Cat C. Dog D. Horse

Ans: A

19. Which comes next? □□□□__

- A. □ B. □ C. □ D. □

Ans: A

20. If CAT = Animal, then ROSE = ?

- A. Fruit B. Vegetable C. Flower D. Bird

Ans: C

21. Which direction do we face when sun rises?

A. East B. West C. North D. South

Ans: A

22. Odd one out:

A. Milk B. Water C. Juice D. Stone

Ans: D

23. Which picture moves with wings?

A. Fish B. Bird C. Horse D. Dog

Ans: B

24. What comes after 1, 3, 5, 7, ?

A. 9 B. 8 C. 6 D. 10

Ans: A

25. Which is odd?

A. Monday B. Friday C. Sunday D. Car

Ans: D

Section 2: Mathematical Reasoning (25 Questions)

26. What is $5 + 3$?

A. 6 B. 7 C. 8 D. 9

Ans: C

27. What is $10 - 4$?

A. 7 B. 6 C. 5 D. 4

Ans: B

28. Which number comes just after 29?

A. 28 B. 31 C. 30 D. 32

Ans: C

29. What is double of 6?

A. 10 B. 11 C. 12 D. 13

Ans: C

30. What is half of 8?

A. 4 B. 5 C. 3 D. 6

Ans: A

31. Which is greater?

A. 13 B. 31 C. 21 D. 10

Ans: B

32. What is $7 - 2 + 3$?

A. 7 B. 8 C. 9 D. 10

Ans: C

33. Which number is between 23 and 25?

A. 22 B. 24 C. 26 D. 20

Ans: B

34. Which one is even?

A. 11 B. 9 C. 4 D. 7

Ans: C

35. What is 4 more than 16?

A. 19 B. 21 C. 20 D. 22

Ans: C

36. What is $9 - 5$?

A. 3 B. 4 C. 5 D. 2

Ans: B

37. Which is smallest?

A. 45 B. 54 C. 23 D. 32

Ans: C

38. What is 3×2 ?

A. 5 B. 6 C. 7 D. 8

Ans: B

39. 20 divided by 2 = ?

A. 5 B. 8 C. 10 D. 15

Ans: C

40. Which number comes just before 50?

A. 51 B. 49 C. 48 D. 47

Ans: B

41. Which number is odd?

A. 12 B. 14 C. 15 D. 16

Ans: C

42. What is 2 more than 99?

A. 100 B. 101 C. 102 D. 98

Ans: C

43. Fill in blank: $4 + \underline{\quad} = 9$

A. 6 B. 5 C. 3 D. 2

Ans: B

44. Which is smallest?

A. 5 tens B. 3 tens C. 7 tens D. 9 tens

Ans: B

45. $2 \text{ tens} + 4 \text{ ones} = ?$

A. 24 B. 42 C. 14 D. 20

Ans: A

46. Which is greater: 80 or 18?

A. 80 B. 18 C. Both same D. None

Ans: A

47. What is 1 less than 30?

A. 31 B. 29 C. 28 D. 32

Ans: B

48. What is $25 + 5$?

A. 20 B. 35 C. 30 D. 40

Ans: C

49. Which is the place value of 5 in 54?

A. 50 B. 5 C. 4 D. 45

Ans: A

50. Which number comes after 99?

A. 100 B. 98 C. 101 D. 90

Ans: A

54. School starts at 9:00 AM. That is?

A. Morning B. Noon C. Evening D. Night

Ans: A

55. If Monday is today, tomorrow is?

A. Sunday B. Wednesday C. Tuesday D. Friday

Ans: C

56. Pizza cut into 4. Eat 1, left?

A. 3 B. 2 C. 4 D. 1

Ans: A

57. $3 \text{ boys} + 2 \text{ girls} = ? \text{ children}$

A. 6 B. 4 C. 5 D. 3

Ans: C

58. 7 birds, 2 fly away. Left?

A. 5 B. 6 C. 4 D. 3

Ans: A

59. $\text{₹}2 + \text{₹}5 + \text{₹}1 = ?$

A. ₹7 B. ₹8 C. ₹6 D. ₹10

Ans: B

60. Watermelon heavier than mango. Lightest?

A. Watermelon B. Mango C. Both D. Can't say

Ans: B

61. One week has how many days?

A. 5 B. 6 C. 7 D. 8

Ans: C

62. Which month comes after June?

A. July B. May C. August D. April

Ans: A

63. Which season is cold?

A. Summer B. Winter C. Rainy D. Spring

Ans: B

64. Which tool shows time?

A. Scale B. Clock C. Book D. Bag

Ans: B

Section 3: Everyday Mathematics (25 Questions)

51. Rani has ₹10. She buys a toy for ₹7. How much left?

A. ₹4 B. ₹2 C. ₹3 D. ₹5

Ans: C

52. A pencil costs ₹5. How many with ₹20?

A. 3 B. 5 C. 4 D. 2

Ans: C

53. There are 4 chairs and 3 tables. How many items?

A. 6 B. 8 C. 7 D. 9

Ans: C

65. Which festival has lights?

A. Holi B. Diwali C. Eid D. Christmas

Ans: B

66. How many hours in a day?

A. 24 B. 12 C. 30 D. 48

Ans: A

67. Which coin is bigger?

A. ₹1 B. ₹5 C. ₹2 D. ₹10

Ans: D

68. Which is faster?

A. Bus B. Car C. Train D. Cycle

Ans: C

69. 1 dozen = ?

A. 6 B. 12 C. 10 D. 8

Ans: B

70. Sun rises in?

A. East B. West C. North D. South

Ans: A

71. There are 24 hours in?

A. 1 Week B. 1 Day C. 1 Month D. 1 Hour

Ans: B

72. How many months in a year?

A. 10 B. 11 C. 12 D. 13

Ans: C

73. Which is used to write?

A. Pencil B. Spoon C. Ball D. Bat

Ans: A

74. Which is the currency of India?

A. Dollar B. Pound C. Rupee D. Yen

Ans: C

75. Which food is healthy?

A. Pizza B. Chips C. Apple D. Burger

Ans: C

76. If $3 + \square = 8$, $\square = ?$

A. 3 B. 5 C. 6 D. 4

Ans: B

77. Ritu has 12 candies. Gives 3, eats 2. Left?

A. 9 B. 7 C. 8 D. 6

Ans: C

78. If 2 pencils = ₹10, 1 pencil = ?

A. ₹6 B. ₹5 C. ₹4 D. ₹2

Ans: B

79. Which is shortest?

A. Giraffe B. Elephant C. Cat D. Horse

Ans: C

80. Train leaves 6:00, reaches 7:00. Time taken?

A. 2 hrs B. 30 mins C. 1 hr D. 90 mins

Ans: C

81. $10 - \underline{\quad} = 4$. Blank = ?

A. 5 B. 6 C. 4 D. 3

Ans: B

82. Aryan has 5 red, 4 blue, 1 green balls. Total?

A. 10 B. 9 C. 8 D. 11

Ans: A

83. 2 tens + 3 ones = ?

A. 13 B. 23 C. 20 D. 30

Ans: B

84. Which pair adds to 10?

A. 4+4 B. 7+2 C. 6+4 D. 8+3

Ans: C

85. Aman sees 2 birds on each of 4 trees. Total?

A. 6 B. 8 C. 10 D. 12

Ans: B

86. Which number makes $5 + \underline{\quad} = 12$?

A. 6 B. 5 C. 7 D. 8

Ans: C

87. Meena has 15 chocolates, gives 5. Left?

A. 9 B. 10 C. 11 D. 12

Ans: B

88. If $4 \times 3 = 12$, then $3 \times 4 = ?$

A. 12 B. 10 C. 11 D. 13

Ans: A

89. Which is smallest?

A. 55 B. 45 C. 65 D. 75

Ans: B

90. $20 + 30 = ?$

A. 40 B. 50 C. 60 D. 70

Ans: B

91. A week has 7 days. 2 weeks = ?

A. 10 B. 12 C. 14 D. 7

Ans: C

92. Circle the correct: 4 tens + 2 ones = ?

A. 42 B. 24 C. 32 D. 14

Ans: A

93. Which is bigger?

A. 88 B. 98 C. 78 D. 68

Ans: B

94. If $6 + 6 = 12$, then $12 - 6 = ?$

A. 5 B. 6 C. 7 D. 8

Ans: B

95. Seema has 3 apples. Her brother gives 2.

Total?

A. 4 B. 6 C. 5 D. 3

Ans: C

96. What is $\frac{1}{4}$ of 12?

A. 4 B. 5 C. 3 D. 2

Ans: A

97. Which comes after 59?

A. 60 B. 61 C. 62 D. 58

Ans: A

98. Fill in blank: $9 - \underline{\quad} = 3$

A. 3 B. 5 C. 6 D. 7

Ans: C

99. Which is heavier?

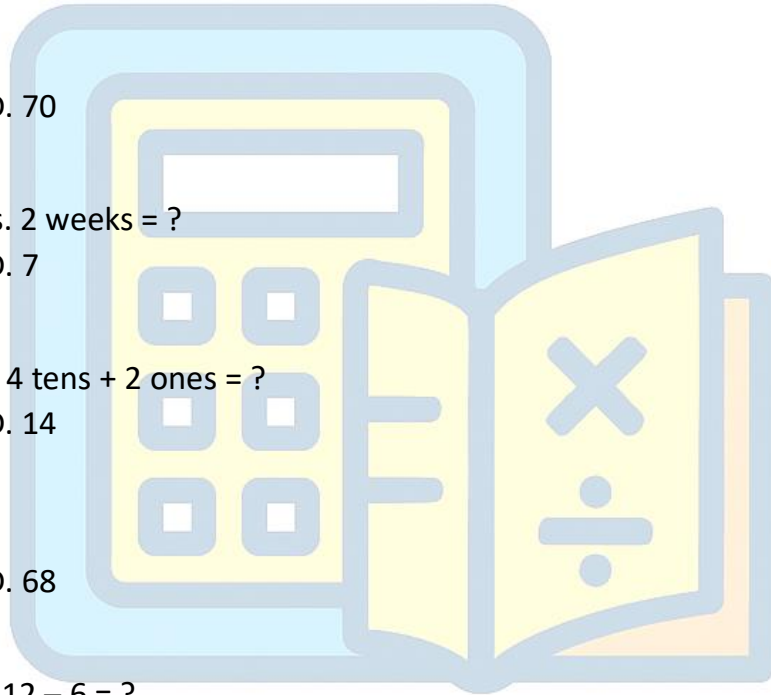
A. Stone B. Cotton C. Both same weight
D. Feather

Ans: A

100. What is 3 more than 97?

A. 99 B. 100 C. 101 D. 102

Ans: C



NACT
MATHS EXAM