




SECTION 1 – Logical Reasoning (25 Questions)

1. Which shape comes next?   

 ?

A)  B)  C)  D) 

Ans: B

2. If 2 =  and 3 =  , what is  +  ?

A) 4 B) 5 C) 6 D) 2

Ans: B

3. Which is the odd one out?

A) Apple B) Mango C) Carrot D) Orange

Ans: C

4. If today is Monday, what will be the day after tomorrow?

A) Tuesday B) Wednesday C) Thursday D) Friday

Ans: C

5. Which number comes next? 2, 4, 6, 8, ?

A) 9 B) 10 C) 12 D) 14

Ans: B

6. Which shape has 3 sides?

A) Circle B) Triangle C) Square D) Rectangle

Ans: B

7. Find the missing shape:    

  ?

A)  B)  C)  D) 

Ans: B

8. If a cat is smaller than a dog, and a dog is smaller than a horse, who is the biggest?

A) Cat B) Dog C) Horse D) All same

Ans: C

9. Which comes first in the alphabet?

A) M B) N C) L D) O

Ans: C

10. Which pair is similar?

A) Pen–Paper B) Shoe–Foot C) Sun–Moon
D) Chair–Book

Ans: A

11. Which number comes next? 5, 10, 15, 20, ?




A) 21 B) 22 C) 25 D) 30

Ans: C

12. Which is the odd one out?

A) Lion B) Tiger C) Elephant D) Chair

Ans: D

13. Which figure comes next?   

  ?

A)  B)  C)  D) 

Ans: B

14. If 1 = A, 2 = B, 3 = C, then 5 = ?

A) E B) F C) G D) H

Ans: A

15. Which is smallest?

A) Ant B) Dog C) Horse D) Elephant

Ans: A

16. Which letter comes after P?

A) O B) Q C) R D) S

Ans: B

17. Complete the sequence: 11, 13, 15, ?

A) 16 B) 17 C) 18 D) 19

Ans: B

18. Odd one out:

A) Red B) Blue C) Green D) Mango

Ans: D

19. Which comes first in numbers?

A) 9 B) 7 C) 8 D) 10

Ans: B

20. Which number should replace the question mark? 2, 4, 8, 16, ?




A) 20 B) 24 C) 32 D) 18

Ans: C

21. Find the missing number: 3, 6, 9, 12, ?

A) 13 B) 14 C) 15 D) 16

Ans: C

22. Which two shapes are same?   



A) 1 & 2 B) 1 & 3 C) 2 & 4 D) 3 & 4

Ans: B

23. Which number is between 25 and 27?

A) 24 B) 25 C) 26 D) 28

Ans: C

24. What is the next letter? A, C, E, G, ?

A) H B) I C) J D) K

Ans: B

25. Which shape has no sides?

A) Circle B) Square C) Triangle D)

Pentagon

Ans: A

6. Look at the series: A, C, E, G, ?

A) I B) H C) J D) K

Ans: A

7. Choose the figure that completes the pattern:     ?

A)  B)  C)  D) 

Ans: A

8. Which two pictures are exactly the same?   

A) 1 & 2 B) 1 & 3 C) 2 & 3 D) None

Ans: A

9. If in a code, CAT = DBU, then DOG = ?

A) EPH B) EOH C) EPG D) DPH

Ans: A

10. Which is the shortest?

A) Pencil B) Ruler C) Needle D) Book

Ans: C

11. If 'hot' is opposite of 'cold', then 'tall' is opposite of...

A) Long B) Small C) Short D) Big

Ans: C

12. Which does not belong?

A) Rose B) Lily C) Lotus D) Apple

Ans: D

13. Fill in the blank: Child is to School as Patient is to...

A) Teacher B) Doctor C) Nurse D) Hospital

Ans: D

14. If 1 = One, 2 = Two, then 3 = ?

A) Four B) Three C) Thirty D) Tree

Ans: B

15. Find the pair: Book → Read, Food → ?

A) Drink B) Eat C) Cook D) Plate

Ans: B

16. Which letter comes before Q?

A) P B) R C) S D) O

Ans: A

SECTION 2 – Verbal & Non-Verbal Reasoning (25 Questions)

1. If 'sun' is to 'day', then 'moon' is to...

A) Night B) Star C) Cloud D) Sunlight

Ans: A

2. Which word does not belong?

A) Cat B) Dog C) Cow D) Chair

Ans: D

3. Rearrange the letters to make a word: P–

E–N–L

A) Lend B) Plan C) Penl D) Lpen

Ans: B

4. If all roses are flowers and all flowers need water, then roses need...




A) Soil B) Water C) Air D) Sunlight

Ans: B

5. Which is opposite of "big"?

A) Large B) Small C) Huge D) Tall

Ans: B

17. Which picture is different?   


A)  B)  C)  D) 

Ans: D

18. Complete the series: Z, X, V, T, ?

A) R B) S C) U D) Q

Ans: A

19. Which word means the same as
"happy"?

A) Sad B) Glad C) Angry D) Tired

Ans: B

20. Odd one out:

A) Run B) Walk C) Jump D) Chair

Ans: D

21. Which is opposite of "up"?

A) Over B) Under C) Above D) High

Ans: B

22. Find the missing letter: B, D, F, H, ?

A) I B) J C) K D) L

Ans: B

23. If all cats are animals, and some animals
are dogs, then all cats are...

A) Dogs B) Animals C) Birds D) None

Ans: B

24. Which pair is similar?

A) Ear–Hear B) Eye–See C) Nose–Smell D)

All

Ans: D

25. Which does not belong?

A) Summer B) Winter C) Rainy D) Mango

Ans: D

2. Which is heavier?

A) Feather B) Stone C) Paper D) Leaf

Ans: B

3. A bag has 3 red balls and 2 blue balls.
How many balls total?

A) 5 B) 6 C) 4 D) 3

Ans: A

4. If you have ₹10 and spend ₹4, how much
is left?

A) ₹6 B) ₹7 C) ₹8 D) ₹4

Ans: A

5. Which clock shows 3 o'clock?

A) Short hand on 3, long hand on 12

B) Short hand on 12, long hand on 3

C) Both hands on 3

D) Short hand on 3, long hand on 6

Ans: A

6. What comes next? 10, 20, 30, 40, ?

A) 45 B) 50 C) 55 D) 60

Ans: B

7. Ravi has 2 apples and gets 3 more. How
many now?

A) 3 B) 4 C) 5 D) 6

Ans: C

8. Which is bigger – 15 or 12?

A) 12 B) 15 C) Both equal D) None

Ans: B

9. Which is in the middle of 5, 7, 9?

A) 5 B) 7 C) 9 D) 6

Ans: B

10. Which shape has no corners?

A) Square B) Triangle C) Circle D)

Rectangle

Ans: C

11. What is $12 - 5$?

A) 5 B) 6 C) 7 D) 8

Ans: C

SECTION 3 – Mental Ability (25 Questions)

1. $5 + 3 = ?$

A) 6 B) 8 C) 7 D) 9

Ans: B

12. Which number is even?

A) 7 B) 9 C) 12 D) 15

Ans: C

13. A week has how many days?

A) 5 B) 6 C) 7 D) 8

Ans: C

14. Which is the smallest 2-digit number?

A) 9 B) 10 C) 11 D) 12

Ans: B

15. $20 \div 5 = ?$

A) 2 B) 3 C) 4 D) 5

Ans: C

16. Which is greater – 45 or 54?

A) 45 B) 54 C) Equal D) None

Ans: B

17. Which is missing? 2, 4, 6, 8, ?

A) 10 B) 12 C) 14 D) 16

Ans: A

18. If $3 \times 3 = 9$, then $4 \times 4 = ?$

A) 12 B) 15 C) 16 D) 18

Ans: C

19. Which is smallest – 25, 35, 15, 45?

A) 25 B) 35 C) 15 D) 45

Ans: C

20. Which number comes before 100?

A) 99 B) 98 C) 101 D) 90

Ans: A

21. How many months have 30 days?

A) 4 B) 5 C) 6 D) 7

Ans: C

22. Which is half of 20?

A) 5 B) 8 C) 10 D) 15

Ans: C

23. $9 + 8 = ?$

A) 16 B) 17 C) 18 D) 19

Ans: B

24. Which is bigger – 2 dozens or 20?

A) 20 B) 22 C) 24 D) 12

Ans: C

25. How many sides does a pentagon have?

A) 4 B) 5 C) 6 D) 7

Ans: B

SECTION 4 – Achievers Section (HOTS) (25 Questions)

1. Which number should replace the question mark? 2, 4, 8, 16, ?

A) 18 B) 24 C) 32 D) 20

Ans: C

2. If all squares are rectangles, and all rectangles are shapes, then all squares are...

A) Shapes B) Circles C) Triangles D) Lines

Ans: A

3. A rabbit runs faster than a turtle. The turtle runs faster than a snail. Who runs the slowest?

A) Rabbit B) Turtle C) Snail D) All same speed

Ans: C

4. Find the missing number: 3, 6, 9, 12, ?

A) 13 B) 14 C) 15 D) 16

Ans: C

5. If $1 = A$, $2 = B$, $3 = C$, then $4 = ?$

A) C B) D C) E D) F

Ans: B

6. Raju is 2 years younger than Meena. Meena is 7 years old. How old is Raju?

A) 5 B) 6 C) 7 D) 8

Ans: B

7. Which two shapes are exactly the same?



A) 1 & 2 B) 1 & 3 C) 2 & 4 D) 3 & 4

Ans: B

8. Which is the correct order from smallest to largest?

- A) Cat – Elephant – Dog
- B) Dog – Cat – Elephant
- C) Elephant – Dog – Cat
- D) Cat – Dog – Elephant

Ans: D

9. If you mix red and yellow, what color do you get?

- A) Orange B) Green C) Purple D) Pink

Ans: A

10. What is the missing letter? A, B, C, D, ?

- A) E B) F C) G D) H

Ans: A

11. If $2 \times 2 = 4$, then $2^2 = ?$

- A) 2 B) 4 C) 6 D) 8

Ans: B

12. Which is heavier – 1 kg cotton or 1 kg iron?

- A) Cotton B) Iron C) Both same D) None

Ans: C

13. A cube has how many edges?

- A) 10 B) 12 C) 14 D) 16

Ans: B

14. Which number is missing? 25, 30, 35, ?, 45

- A) 36 B) 37 C) 40 D) 42

Ans: C

15. If circle = 0 sides, triangle = 3 sides, then square = ?

- A) 2 B) 3 C) 4 D) 5

Ans: C

16. In a family, father is older than mother, mother is older than son. Who is youngest?





- A) Father B) Mother C) Son D) All same

Ans: C

17. If $5 = E$, then $10 = ?$

- A) J B) K C) I D) H

Ans: A

18. Which figure is odd?    

- A)  B)  C)  D) 

Ans: D

19. Fill the blank: 2, 4, 6, 10, 16, ?

- A) 18 B) 24 C) 26 D) 28

Ans: B

20. Which number is missing? 100, 90, 80, ?, 60

- A) 70 B) 65 C) 75 D) 85

Ans: A

21. If $12 \div 3 = 4$, then $24 \div 6 = ?$

- A) 3 B) 4 C) 5 D) 6

Ans: B

22. Which is the odd one?

- A) Monday B) Friday C) Sunday D) January

Ans: D

23. If 1 dozen = 12, then 2 dozen = ?

- A) 20 B) 22 C) 24 D) 26

Ans: C

24. Which comes next in pattern?    ?

- A)  B)  C)  D) 

Ans: B

25. Which number is between 99 and 101?

- A) 100 B) 101 C) 98 D) 97

Ans: A